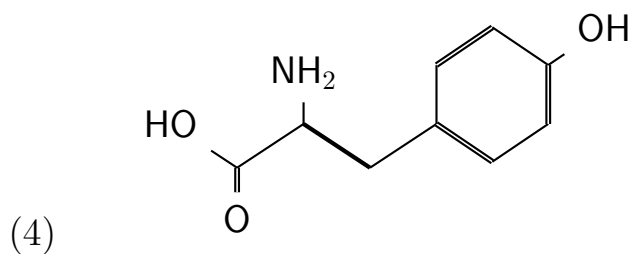
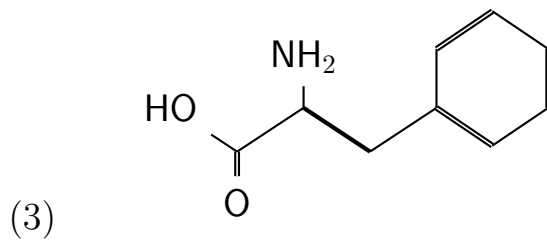
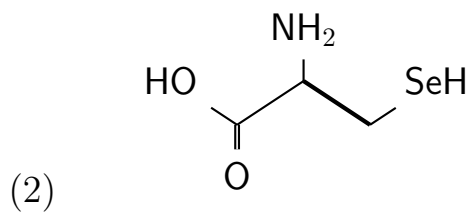
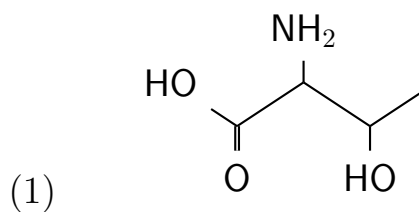


Recognize amino acid

Name _____ Date _____

Recognize an amino acid by formula.





Answers

Recognize an amino acid by formula.

Amino acid groups:

- A. Amino acids with electrically charged side chains.
- B. Amino acids with polar uncharged side chains.
- C. Amino acids: special cases.
- D. Amino acids with a hydrophobic side chain.

<i>Amino acid</i>	<i>Group</i>
(1) Threonine	B. Amino acids with polar uncharged side chains
(2) Selenocysteine	C. Amino acids: special cases
(3) Phenylalanine	D. Amino acids with a hydrophobic side chain
(4) Tyrosine	D. Amino acids with a hydrophobic side chain