

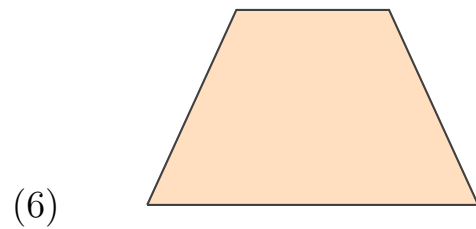
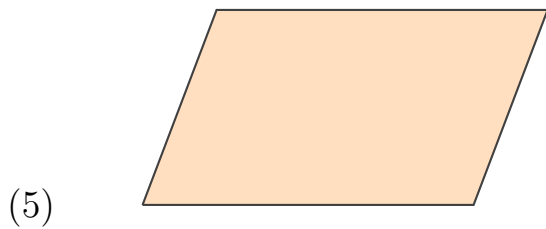


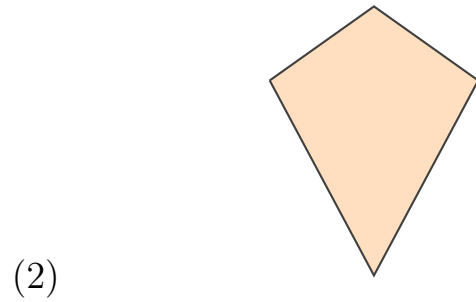
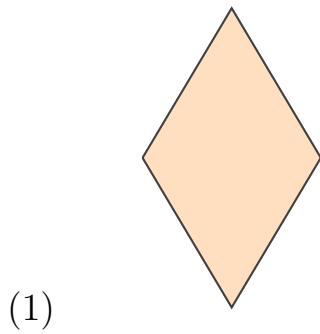


Types of Quadrilaterals

Name _____

Date _____

Recognize a quadrilateral. Is it a regular polygon? Does it have a symmetry axis?





Answers

Recognize a quadrilateral. Is it a regular polygon? Does it have a symmetry axis?

	<i>Quadrilateral</i>	<i>Regular?</i>	<i>Symmetric?</i>
(1)	Rhombus	No	Yes
(2)	Kite	No	Yes
(3)	Rectangle	No	Yes
(4)	Square	Yes	Yes
(5)	Parallelogram	No	No
(6)	Isosceles Trapezoid	No	Yes