

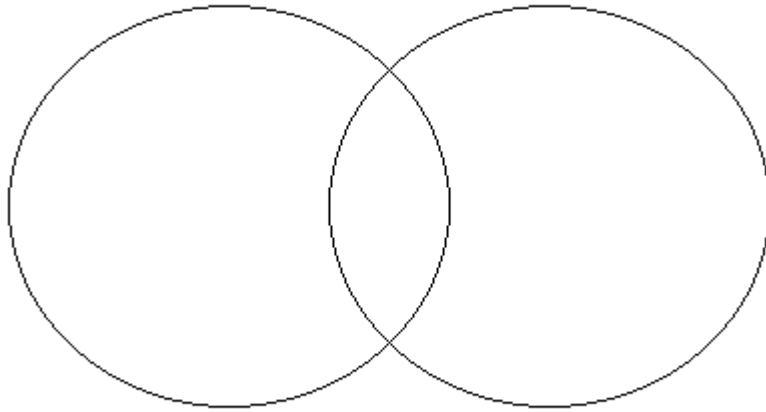


Venn Diagrams

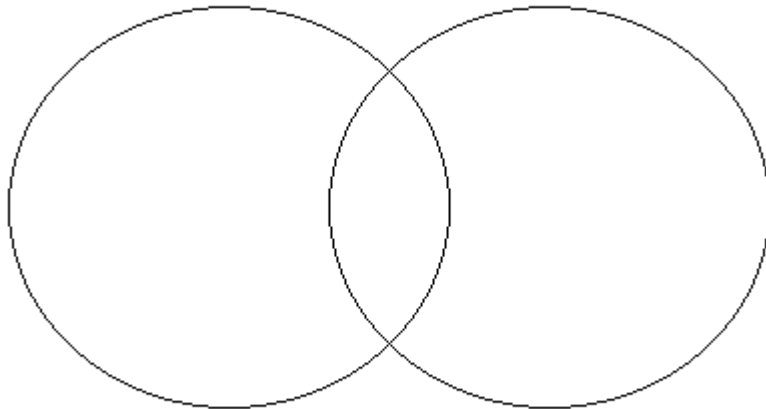
Fill up the diagram

Name _____ Date _____

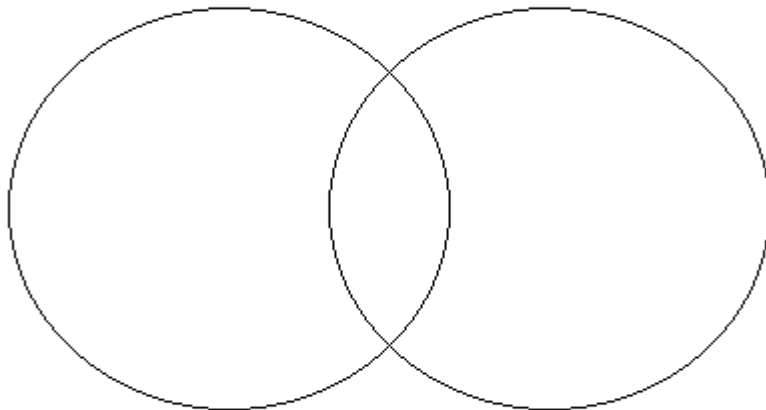
$\Pi = \{q, z, x, 1\}$
 $\Lambda = \{z, q, x, 9\}$



$\Theta = \{j, x, b, 7, i\}$
 $\Pi = \{j, w, 0, o, x\}$



$\Pi = \{c, d, y\}$
 $\Theta = \{d, y, v\}$





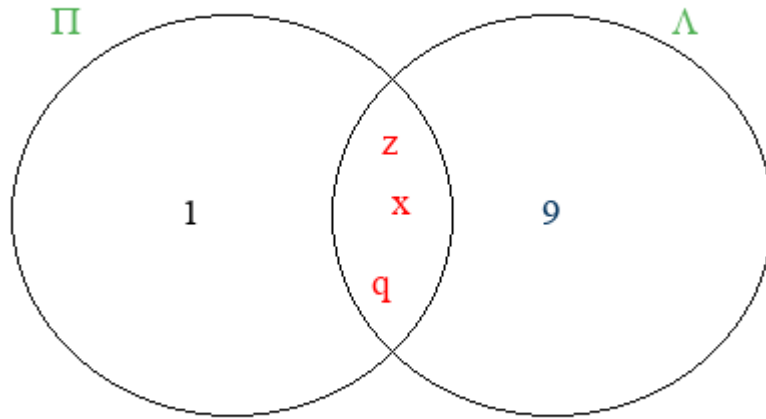
Venn Diagrams

Fill up the diagram

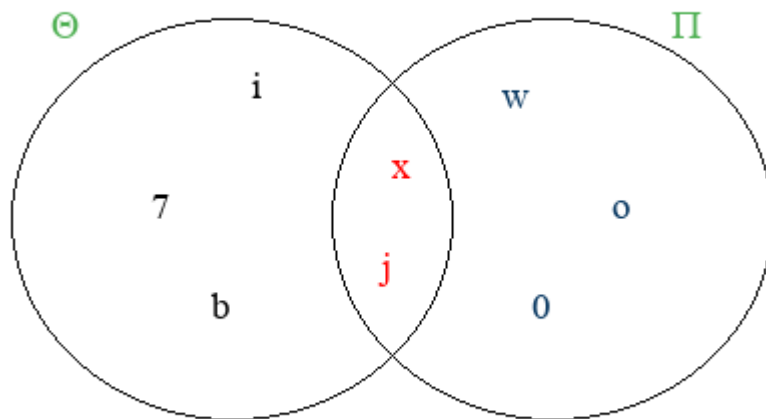
Name _____ Date _____

ANSWER KEY

$$\Pi = \{q, z, x, 1\}$$
$$\Lambda = \{z, q, x, 9\}$$



$$\Theta = \{j, x, b, 7, i\}$$
$$\Pi = \{j, w, 0, o, x\}$$



$$\Pi = \{c, d, y\}$$
$$\Theta = \{d, y, v\}$$

